

Worksheet: -11 Subject: - Mathematics

Class:-VI

Teacher:-Mrs. Poonam Sunil

Name:-_____

Class & Sec.:-_____

Roll No.:-_____

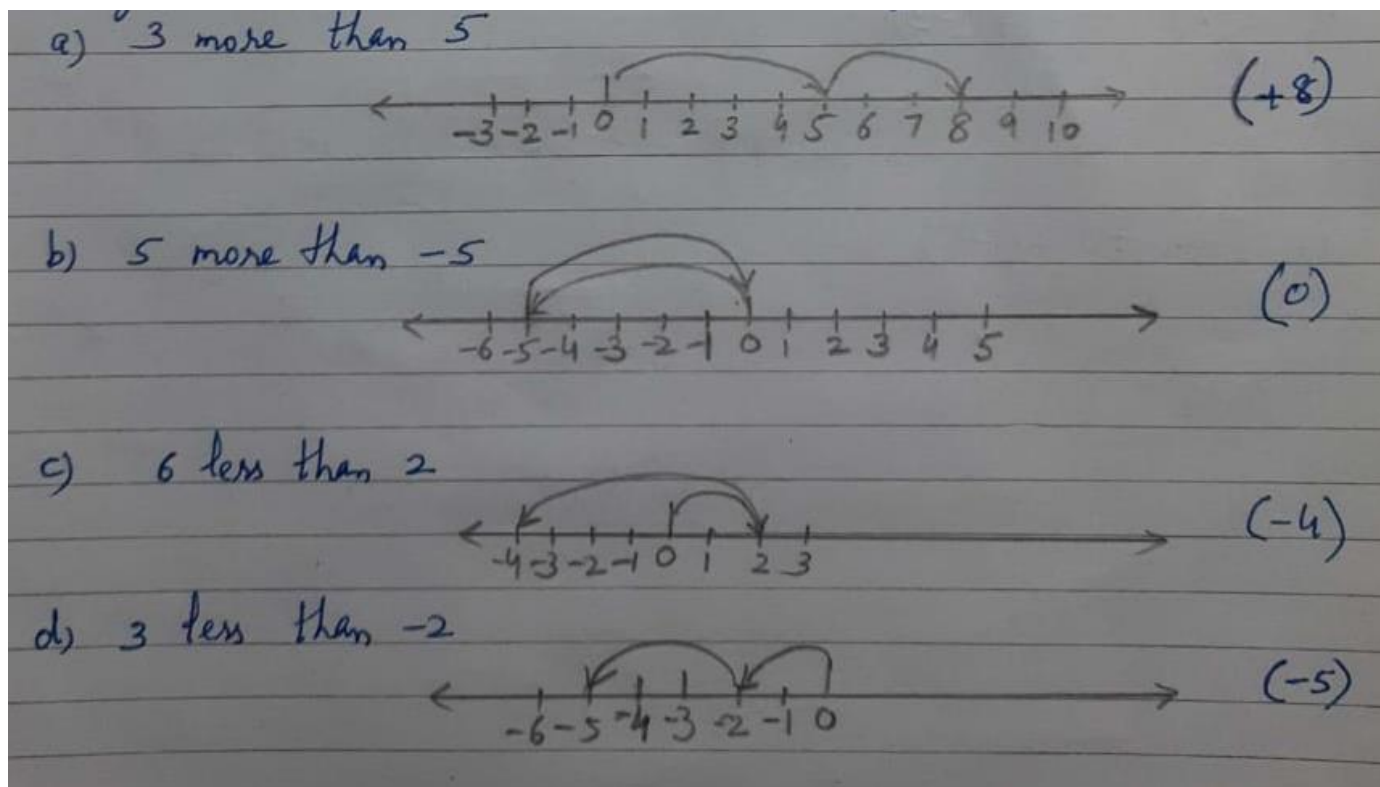
Date:-03/08/2021

Good Morning Students!

Today we will do **Addition of INTEGERS.****Rules:-**


- When you have two positive integers, like $(+3)+(+2) = +5$
- When you have two negative integers, like $(-2) + (-1) = -(2+1) = -3$
- When you have one positive and one negative integer, we subtract, but answer will take the sign of the bigger integer.

$$-10+8=-2$$


Ex:- 6.2**Q.1) Using the number line write the integer which is**

Q.2) Use number line and add the following integers.


a) $9 + (-6)$




b) $5 + (-11)$




c) $(-1) + (-7)$



d) $(-5) + 10$



e) $(-1) + (-2) + (-3)$



f) $(-2) + 8 + (-4)$

